

Today is 15th of February 2021

Teacher: Célia Monteiro

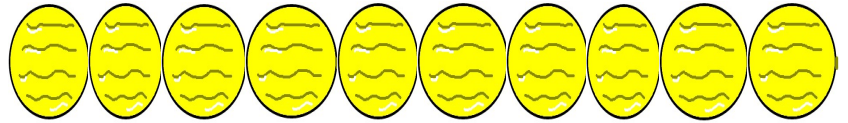
Grade: 3º. Ano \_\_\_\_\_

Student: \_\_\_\_\_

## NUMBERS

A- LIGUE O NÚMERO AS SUAS QUANTIDADES.

1- ONE




2- TWO



3- THREE



4- FOUR



5- FIVE



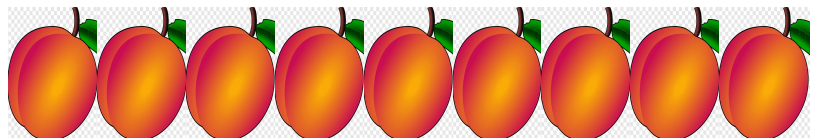
6- SIX



7- SEVEN



8- EIGHT



9- NINE



10-TEN

